

NTI DAY #9
(weather-closed school day)

PACKET
NINE
(Social Studies)

General Directions:

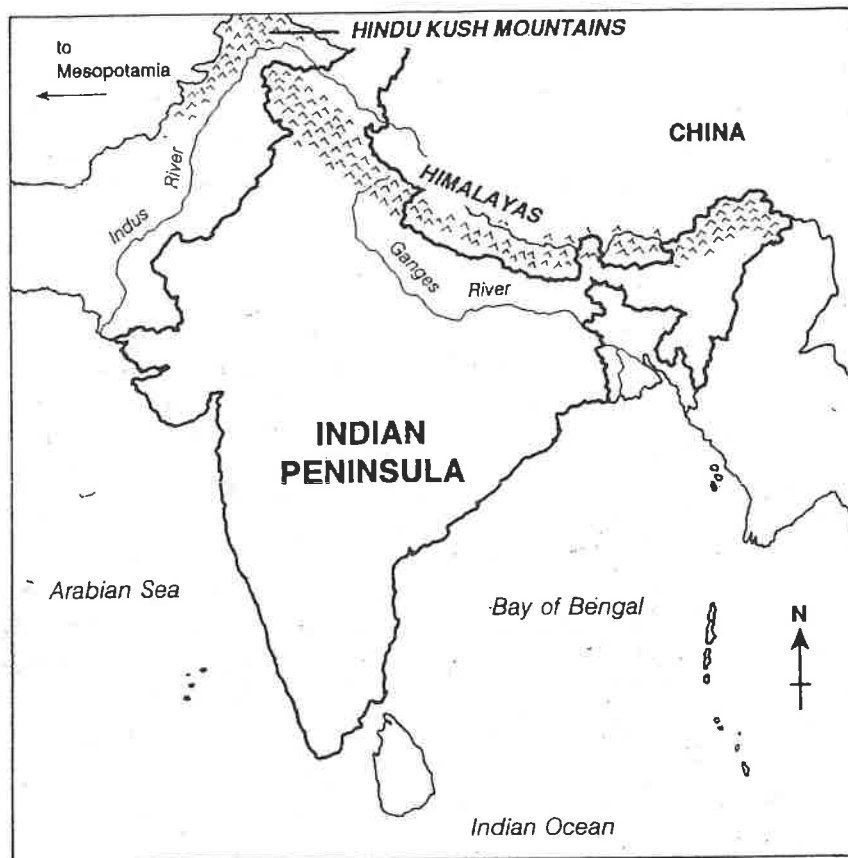
Due to weather, Harrison County Schools are closed. In an effort to utilize this day on the school calendar, your child is assigned and should work on this “packet” of school work today. It will count as a grade for this subject. The work attached is specific to the subject listed above. Please contact your child’s teacher of this subject at 234-7123 in the event you/your student have questions on this packet. Staff and teachers reported to HCMS today and are available should you have questions.

While this is DUE two (2) weeks after our return to school, we **strongly encourage** students to turn it in to their teacher **as soon as it’s complete** (soon after the NTI day) to avoid it being lost, eaten by the family pet, burned to keep warm, etc ☺

SKILLS

Name _____ Date _____

Fill in the circle before the correct answer. Use the map below to answer the questions.



























- What feature is missing from this map?
 (a) cities (b) mountains (c) rivers (d) oceans
- The Indus River Valley is located in what part of the Indian peninsula?
 (a) northeast (b) southeast (c) northwest (d) southwest
- The Indus River flows into the _____.
 (a) Ganges River (b) Indian Ocean (c) Bay of Bengal (d) Arabian Sea
- What body of water is on the eastern side of the Indian peninsula?
 (a) Bay of Bengal (b) Indus River (c) Arabian Sea (d) Indian Ocean
- In which direction would people have to go to travel from the Indus River Valley to the Fertile Crescent?
 (a) north (b) west (c) south (d) east





SKILLS

Name _____ Date _____

Fill in the circle before the correct answer. Use the chart to answer the questions.

Examples of Cuneiform Writing

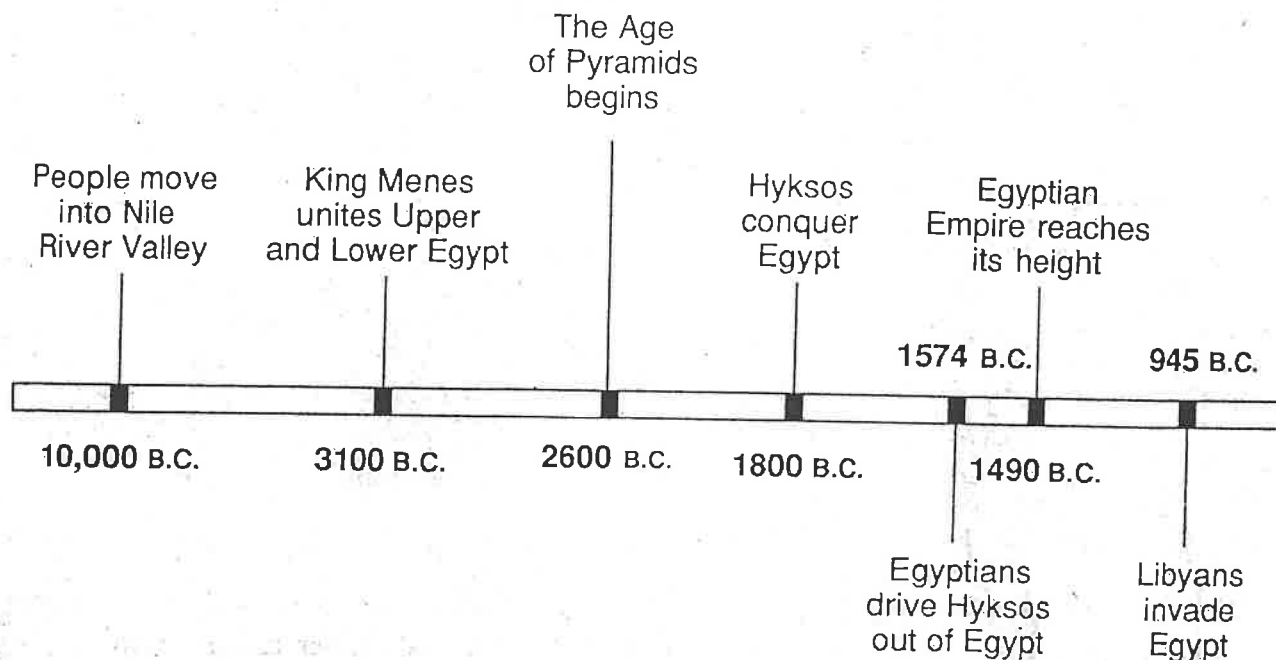
MEANING	Outline Character 3000 B.C.	Cuneiform 2000 B.C.	Assyrian 700 B.C.	Babylonian 500 B.C.
The Sun				
God or Heaven				
Fish				
Man				
Ox				
Mountain				

- The cuneiform character that remained closest to its original form was the one that represented _____.
 (a) Fish (b) Man (c) Mountain (d) Sun
- The chart shows that cuneiform developed from pictures to _____.
 (a) letters (b) symbols (c) words (d) numbers
- Which Babylonian cuneiform example represents an ox?
 (a)  (b)  (c)  (d) 
- This early form of writing was called "cuneiform" because its characters looked _____.
 (a) colorful (b) wedge shaped (c) rectangular (d) lifelike
- Between which two periods did the least amount of change occur in cuneiform styles?
 (a) 3000 B.C. and 2000 B.C. (b) 2000 B.C. and 700 B.C.
 (c) 700 B.C. and 500 B.C. (d) 3000 B.C. and 700 B.C.

SKILLS

Name _____ Date _____

Fill in the circle before the correct answer. Use the time line to answer the questions.

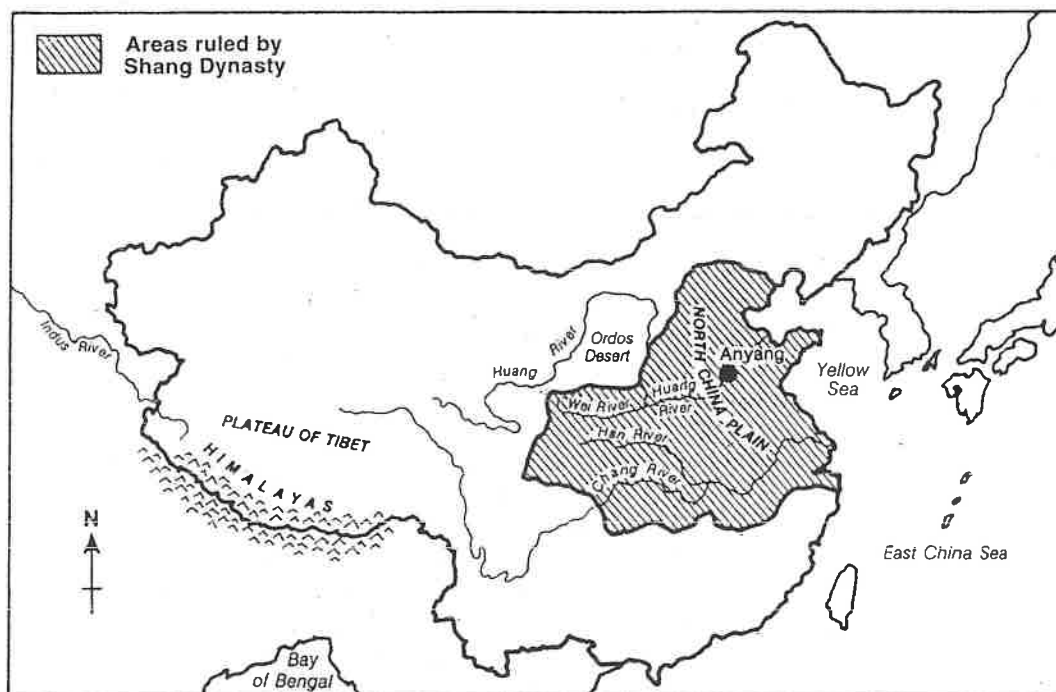


11. The Egyptian Empire reached its height in about the year _____.
 - (a) 1800 B.C.
 - (b) 1574 B.C.
 - (c) 1490 B.C.
 - (d) 945 B.C.
12. People began moving to the Nile River Valley in _____.
 - (a) 10,000 B.C.
 - (b) 3100 B.C.
 - (c) 2600 B.C.
 - (d) 1800 B.C.
13. What happened in about the year 2600 B.C.?
 - (a) Egypt was united.
 - (b) The Libyans invaded Egypt.
 - (c) The Egyptians drove out the Hyksos.
 - (d) The Age of Pyramids began.
14. About how many years passed between the time the Egyptians drove out the Hyksos and the time the Libyans invaded Egypt?
 - (a) 250
 - (b) 500
 - (c) 600
 - (d) 750
15. What major event occurred in the year 3100 B.C.?
 - (a) Menes united Upper and Lower Egypt.
 - (b) The Libyans invaded Egypt.
 - (c) The Egyptian Empire reached its height.
 - (d) The Hyksos conquered Egypt.

SKILLS

Name _____ Date _____

Fill in the circle before the correct answer. Use the map below to answer the questions.



16. The ancient city of Anyang is located on the _____.
 (a) Han River (b) Yellow Sea (c) Chang River (d) Huang River
17. The Chang River is _____ of the Huang River.
 (a) north (b) south (c) east (d) west
18. A tributary of the Huang River is the _____.
 (a) Wei River (b) Chang River (c) Han River (d) Indus River
19. The source of the Chang River is in the _____.
 (a) Ordos Desert (c) Plateau of Tibet
 (b) East China Sea (d) Bay of Bengal
20. Before flowing into the Yellow Sea, the Huang River passes through the _____.
 (a) Himalayas (c) Indus River
 (b) North China Plain (d) East China Sea

Name: _____

Block: _____

*Directions: Use the following documents to answer the questions which follow***Document 1**

Comparing Republican Governments		
	Rome	US
Executive	<ul style="list-style-type: none"> Two consuls, elected by the assembly for one year-chief executives of the government and commanders-in-chief of the army 	<ul style="list-style-type: none"> A president, elected by the people for four years-chief executive of the government and commander-in-chief of the army
Legislative	<ul style="list-style-type: none"> Senate of 300 members, chosen from aristocracy for life-controls foreign and financial policies, advises consuls. Centuriate Assembly, all citizen-soldiers are members for life- selects consuls, makes laws. Tribal Assembly, citizens grouped according to where they live are members for life – elects tribunes and makes laws. 	<ul style="list-style-type: none"> Senate of 100 members, elected by the people for six-year terms-makes laws, advises president on foreign policy. House of Representatives of 435 members, elected by the people for two years- makes laws, originates revenue bills.
Judicial	<ul style="list-style-type: none"> Praetors, eight judges chosen for one year by Centuriate Assembly- two oversee civil and criminal courts (the others govern provinces). 	<ul style="list-style-type: none"> Supreme Court, nine justices appointed for life by president-highest court, hears civil and criminal appeals cases.
Legal code	<ul style="list-style-type: none"> Twelve Tables- a list of rules that was the basis of Roman legal system 	<ul style="list-style-type: none"> U.S. Constitution- basic law of the United States
Citizenship	<ul style="list-style-type: none"> All adult male landowners 	<ul style="list-style-type: none"> All native-born or naturalized adults

2a Using the document, give 3 similarities between governments of Rome and the United States

2b How is the government of Rome different from Athens' direct democracy? (use Greece notes on Athens)

Document 2

Rome's location gave it easy access to the riches of the lands ringing the Mediterranean Sea. Roman merchants moved by land and sea. They traded Roman wine and olive oil for a variety of foods, raw materials, and manufactured goods from other lands.

2a Identify the two major exports of the Roman economy.

2b Explain how geography impacted Rome's economy.

Document 3

Greek god	Relationship	Role	Attribute	Roman Counterpart
Zeus	husband and brother of Hera	King and father of gods, sky.	Thunderbolt, eagle.	Jupiter
Hera	wife and sister of Zeus	Queen and mother of gods; women, marriage, maternity.	veil, cuckoo, pomegranate, peacock.	Juno
Athena	daughter of Zeus, but not of Hera. Sprung from the head of Zeus fully-formed.	war (strategy), wisdom, weaving, protector of Athens	Owl, Armor, shield, <i>gorgoneion</i> (head of Medusa on breast plate)	Minerva
Ares	son of Hera and Zeus	war, strife, blind courage	Armor	Mars
Aphrodite	Homer: daughter of Zeus and Dione (a Titan); Hesiod: she sprung from the sea foam that formed around the severed genitals of Uranus.	love, beauty	Cupid, Eros (her son)	Venus
Apollo	son of Zeus and Leto (daughter of the Titans Coeus and Pheobe); brother of Artemis	solar light, reason, prophecy, medicine, music	lyre, bow, quiver	Phoebus

3a Identify 2 traits this chart tells you about Roman religion?